


Map Quiz

1. What is the symbol for a primary improved road?

a)



b)



c)



d)



2. What does this map symbol represent?



- a) Different types of crossroads.
- b) Church.
- c) Cemetery / Graveyard.
- d) A railroad crossing.

3. To represent a glacier, which map symbol would you use?

a)



b)




c)



d)



4. What does this map symbol represent?



- a) An orchard.
- b) A forest.
- c) Scrub brush.
- d) A lawn or trimmed grass

5. What does this map symbol represent?



- a) Factories and cement mixers.
- b) Types of highway markers.

- c) A church or a cemetery.
- d) Cave, tunnel, or mine entrance

6. On a hike, which map symbols represent a water source?

a) Other than major rivers, water sources would not appear on most maps.

b)



c)



d) Any blue area with a small "p" for potable next to it.

7. Which map symbol would indicate a place where two trains would pass?


a)



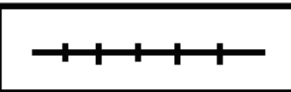
b)



c)



d)




8. Where would you look to find a nice waterfall to take pictures of on your hike?

a)



b)



c)



d)



9. These tiny map symbols represent what important feature for hikers?



- a) A good place to camp and eat.
- b) These are used for a scenic overlook that would be a good place to stop for pictures.
- c) A place where trails cross, or a shortcut.
- d) This represents downhill sections of a trail.

10. In the meaning of map colors, red stands for what?

- a) Water, such as lakes, streams, springs, marshes, and water tanks.
- b) Highways or boundaries..
- c) Contour lines and standard elevations.
- d) Absence of major vegetation.

11. In the meaning of map colors, black stands for what?

- a) Man-made structures and place names (buildings, roads, trails, bridges, railroads).
- b) Supplementary contour lines and levees.
- c) Only used to clearly outline water areas.
- d) Landmark lines, telephone lines, power transmission lines, and fences.